

कक्षा :- IV	कार्य-पत्रक निर्देश :- • पुस्तक की लिखावट ही आदर्श लेखन का आधार है। • समस्त लेखन-कार्य शुद्ध, सुंदर एवं सुस्पष्ट लिखावट में ही करें।	विषय :- हिंदी शीर्षक :- अभ्यास कार्य-पत्रक (अवकाशकालीन)
स्तर :- एक		

1. निम्नलिखित वाक्यों में विशेषण शब्दों के नीचे रेखा खींचिए तथा उनका भेद लिखिए -

- (क) सरला चतुर बालिका है।
 (ख) यह लड़का बड़ा परिश्रमी है।
 (ग) तीन किलो दूध यहाँ लामो।
 (घ) मेरे घर एक साप्ताहिक पत्रिका आती है।

2. क्रिया का सही रूप भरकर वाक्यों को पूरा कीजिए -

- (क) बच्चों ने पाठ _____। (पढ़ना)
 (ख) मुझे भूख _____। (लगना)
 (ग) मेहमानों ने खाना _____। (खाना)
 (घ) माताजी कपड़े _____। (सिलना)

3. अपनी अच्छी सैहत और शारीरिक ताकत के लिए आप क्या-क्या खाएंगे उन पर गोला बनाएं -

चटपटी अंकुरित दाल गर्म समोसे मीठा दूध
 ठंडी आइसक्रीम मसालेदार अचार रसीला आम
 कुरकुरी मक्का की रोटी रंगीन टॉफी खुशबूदार दाल

4. दिए गए शब्दों के गलत पर्यायवाची शब्दों पर गोलाम बनाइए -

(क) रात -	रात्रि	दिन	निशा
(ख) भाग -	पावक	अनल	जलना
(ग) पानी -	मीर	भाग	जल
(घ) सूर्य -	सूरज	आदित्य	गगरी

5. सही जोड़ें बनाइए -

(क) आधी	(ए) स्वाद
(ख) करारी	(आ) हाल
(ग) खट्टा	(आ) रात
(घ) बकिया	(ए) भुख
(ङ) बुरा	(ए) मट्ठा

6. आप अपने राष्ट्रपिता के बारे में क्या जानते हैं?

(क) पूरा नाम - _____

(ख) जन्मतिथि - _____

(ग) पिता का नाम - _____

(घ) माता का नाम - _____

(ङ) जन्मभूमि - _____

(च) उनका स्वर्गवास - _____

(छ) उनके अंतिम शब्द - _____

7. निम्नलिखित प्रश्नों के उत्तर लिखिए -

- (क) आश्रम में लोग क्या-क्या काम करते थे ?
(ख) धनी ने गाँधी जी से सुबह के समय बात करना क्यों ठीक समझा होगा ?
(ग) बच्चों ने खाने-पीने की चीजें दींके में क्यों रखी ?
(घ) बिल्ली क्या करती है ? वह क्या-क्या खा जाती है ?

उत्तर

(क)

(ख)

(ग)

(घ)

O. P. Tindal School

Holiday Homework (2022-23)

Class - IV

Sub. - S. St.

Answer in brief :-

- (i) What are industries?
- (ii) Why do we celebrate Van Mahotsav?
- (iii) Name the agencies or organisations which look after the wildlife.
- (iv) Why have national parks and wildlife sanctuaries been set up?
- (v) What are coniferous trees?
- (vi) Give the classification of industries based on their sizes. Give two examples of each industry.

Answer these questions

- Why do we need industries? List its three advantages.
- i) How are forests important for us?
 - ii) Where do we find thorny, evergreen and mangrove forests in India?
 - iii) Describe the types of Industries based on raw material.

Holiday Homework

Subject- English

1. In your English classwork notebook, write the basic and past form of any five verbs and learn them too.

2. Project :- Make five finger puppets and label them with

1. Common nouns

2. Proper nouns

3. Pronouns

4. Verbs

5. Adjectives

(Take help from page number 67 of your English Grammar Book)

3. Think and answer :-

(a) Why do you think King Lear was unhappy with Cordelia's reply?

Instruction :- Write the answer of this question in your homework notebook.

O.P. Jindal School Patratu
Holiday homework.

Class-IV

Subject: Science

Answer these questions:-

- Q.1. what is reproduction?
- Q.2. what are the two methods of reproduction?
- Q.3. what is moulting?
- Q.4. what is metamorphosis?
- Q.5. why do birds need to make their nests.
- Q.6. Egg albumen consist which nutrients?

Give answer in details:-

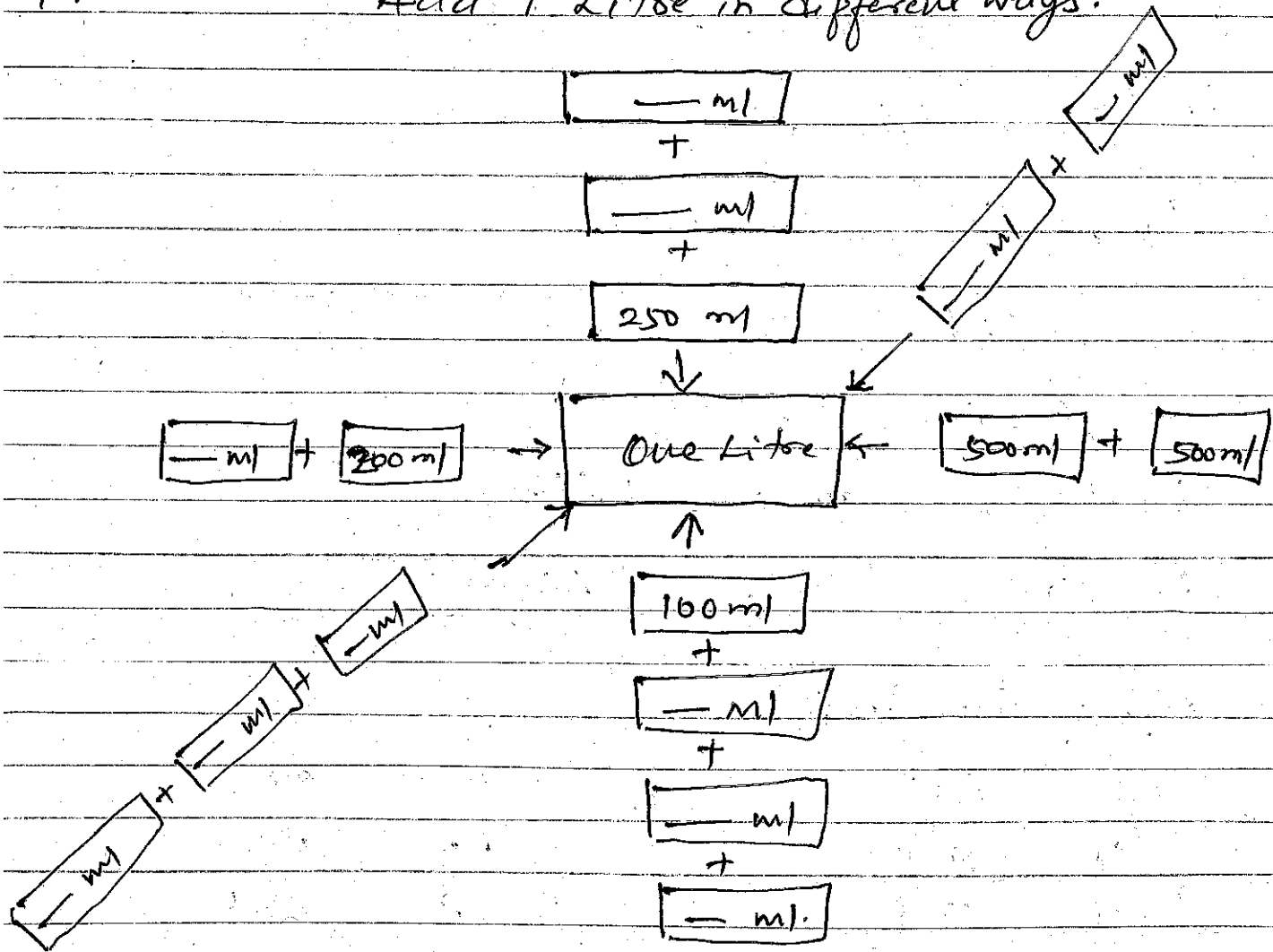
- Q.1. Write a short notes on the life cycle of a hen.
- Q.2. Write a short notes on the "Butterfly man" (Isaac David Kehimkar)
- Q.3. what are mammals? write two characteristic features.
- Q.4. Describe the structure of an egg with the help of diagram.

Holiday Home Work

Class :- IV

Sub :- Mathematics

1. Add 1 Litre in different ways.



2. Write L or ml to measure the following.

1. Milk in a cup —
2. Medicine in a bottle —
3. Water in a fish tank —
4. Cooking oil in a jar —

3. Add to make these total 1 Litre

a. $450 \text{ ml} + \underline{\hspace{2cm}} = 1 \text{ L}$

b. $\underline{\hspace{2cm}} + 325 \text{ ml} = 1 \text{ L}$

c. $\underline{\hspace{2cm}} + 105 \text{ ml} = 1 \text{ L}$

d. $225 \text{ ml} + \underline{\hspace{2cm}} = 1 \text{ L}$

4. Solve the following.

a. $1 \text{ Litre} = \underline{\hspace{2cm}} \text{ ml}$

b. $\frac{1}{4} \text{ Litre} = \underline{\hspace{2cm}} \text{ ml}$

c. $4 \times \underline{\hspace{2cm}} \text{ ml} = 1 \text{ Litre}$

d. $10 \times \underline{\hspace{2cm}} \text{ ml} = 1 \text{ Litre}$

5. Find the Sum:

a.	L	ml
	4	825
+	2	175
<hr/>		



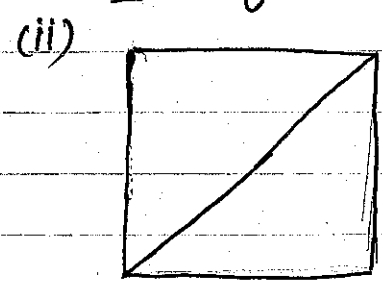

b.	L	ml
	13	592
+	8	095
<hr/>		

6. Find the difference


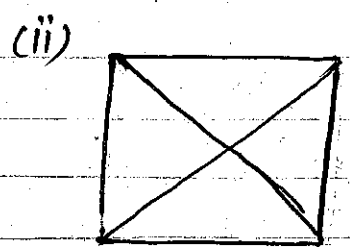
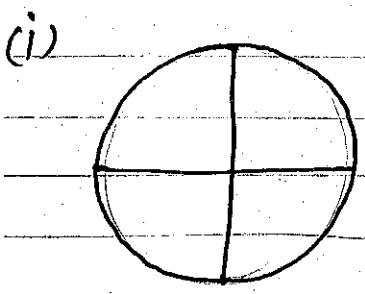
a.	L	ml
	8	702
-	5	402
<hr/>		

b.	L	ml
	11	950
-	7	675
<hr/>		

7. Colour $\frac{1}{2}$ of each



8. Colour $\frac{1}{4}$ of each



Holidays Home-work

Class IV

Sub: Computer

Short Answer Questions.

1) A group of students want to go for a tour. what do you think would help them in making out the plan for the tour successful. [Write algorithm]

2) Harish wants to buy a new T-shirt from 'Firayalal Mall', and if it is not available then he will buy it online. Make an algorithm for the above situation.

3) After whose name is term algorithm coined? what does the term mean?

4) When we cut or copy a content in Ms-Word, where does it gets stored?

5) You are taking notes in your class you write in a notebook, but sometimes the written text is not straight. which feature in word processor will help you to display the text on left or right side symmetrically or properly aligned.

6) You want to modify a document with changes like changing the font, alignment, size, colour, style. What features of word are you trying to use.

Long Answer Questions.

1) Draw, colour and write about any two output devices.

2) From the following list identify the input and output devices. Also define them.

Keyboard, Printer, Joystick, LCD Scanner, Barcode Reader, Mouse

3) Imagine a situation where a student gets ready to go to the puja pandal and performs puja. Write down algorithm for above.

4) Write an algorithm to make a rangoli.