

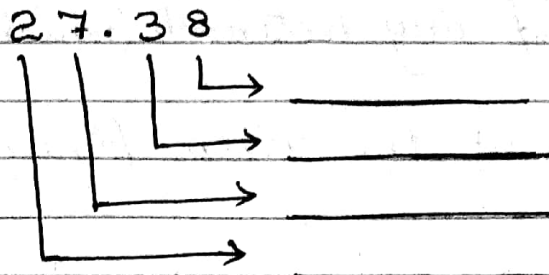
O. P. JINDAL SCHOOL, PATRATU  
SESSION 2022-23

STD V.

SUB: MATHS

VACATION HOMEWORK 2022-23

1) Write the place-value of each digit



2) Draw the figure and shade its  $\frac{1}{2}$  (half) parts.



3) Write the following as decimals.

a)  $\frac{9}{10} =$  \_\_\_\_\_

b)  $\frac{249}{100} =$  \_\_\_\_\_

4) Find the sum of 1000, 100, 10 and 1.

5) Find the difference between 30.29 and 15.92

6) Find the product of 20 and 30.

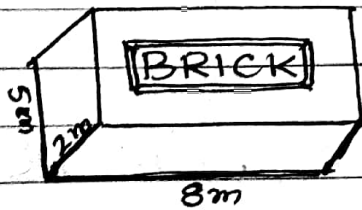
(U. C. KAR)

7) Draw a net of a cube.

8) Make a cube (small) with a cardboard.

9) Make a birthday cap (small) with a thick sheet  
eg. cover page of any notebook. (which is not in use)

10) Find the volume of the given figure



D. P. Tindal School Patratu

Holiday Homework (2022-23)

Class - V

Sub. S.S.T

1) Answer in brief

- (i) What is a Tsunami? Name some countries which are prone to Tsunami.
- (ii) What is an epicentre?
- (iii) What is a landslide?
- (iv) What are Trans Continental railway?
- (v) In which part of the world is the most dense air network?
- (vi) Why do we need the means of transport?

2) Answer these questions:-

- (i) Name the official airlines of India? Also name some private airlines of India.
- (ii) How does an earthquake occur? Why is it considered as dangerous?
- (iii) Why do floods occur? How are they harmful to us?
- (iv) What is a volcano? How many types of volcanoes are there? Explain.

O.P. Jindal School, Patratu

Holiday Homework

Class - V

Subject: Science

Answer these question :-

- Q.1. Name the two units to measure temperature.
- Q.2. What is fathom?
- Q.3. What is measurement?
- Q.4. What is handspan?
- Q.5. What is mass? Name three units of measurement for mass.
- Q.6. What do we use to measure time?

Give answers in details

- Q.1. With the help of measuring tape, ruler or scale measure the length of five objects in your home in centimetres, then convert it into metres.
- Q.2. Collect the pictures of various types of clocks that were used from ancient times to the present, stick them on a chart paper note-book.
- Q.3. Discuss with examples how people measured length in ancient times.
- Q.4. What is length? Name four units of measuring length.

## Holiday Homework

Class - V

Sub. - English

### Short type Questions:

1. Find the meaning of the given words from the lesson 'The story of Dandi March'.  
(a) slush (b) wade (c) unjust (d) essential
2. Name the author of the story 'The story of Dandi March'.
3. Name the poet of the poem 'Don't Give up!'.
4. Give the past form of the following:  
(a) leave (b) fly (c) give (d) make
5. Give plural form of the given words.  
(a) child (b) tooth (c) man (d) foot
6. Correct the following sentences.  
(a) I has some interesting books.  
(b) The children was playing in the street.

### Long type Questions:

1. Write a short paragraph on 'How I celebrated Diwali?'.
2. Write a short paragraph on 'Yoga and its benefit'.
3. Arrange the given sentences in correct sequence.

- (a) She lives (with her parents/in a small house)  
(b) It rained (last week/every day)

4. Underline <sup>the</sup> subject in the sentences :

(a) Cinderella lost her glass slipper.

(b) We are going to the museum.

(c) They are waiting at the bus stop.



कक्षा :- V

■ कार्य-पत्रक ■

विषय :- हिंदी

स्तर :- एक

■ निर्देश :-

- पुस्तक की लिखावट ही आदर्श लेखन का आधार है।
- समस्त लेखन - कार्य शुद्ध, सुंदर एवं सुस्पष्ट लिखावट में ही करें।

शीर्षक :- अभ्यास कार्य-पत्रक  
(असकारणकालीन)

■ रिमझिम (पाठ्यपुस्तक) : लघु उत्तरीय प्रश्न :

1. रतन अन्य बच्चों से किस प्रकार भिन्न था ?

उत्तर :-

2. रतन को अवश्य पड़ोस से निकला हुआ क्यों कहते हैं ?

उत्तर :-

3. बच्चे रतन के साथ खेलते हुए क्यों घबराते थे ?

उत्तर :-

4. आरिफ और सलीम अपने बड़ों से परेशान क्यों थे ?

उत्तर :-

5. दादी ने आरिफ को मारने के लिए हाथ क्यों उठाया ?

उत्तर :-

6. किसने, किससे कहा ? (पाठ: 10. एक दिन की बादशाहत)

(क) "हर वक्त मेंढक की तरह टर्रा जाता है।"

(ख) "कोई जरूरत नहीं है उद्यम मचाने की।"

(ग) "अम्मी, शाम को मैं देर से आऊँगा।"

(घ) "हमारे कॉलेज में आज फंक्शन है।"

7. उचित शब्दों से रिक्त स्थानों की पूर्ति कीजिए —

समझ	अदृश्य	बोल	आँखों	खेलने
-----	--------	-----	-------	-------

(क) रतन किसी पड़ोस से निकलकर खेलने आता था।

(ख) रतन नहीं सकता था।

(ग) बच्चे रतन की छबराहटों को नहीं पाते थे।

(घ) रतन के अंदर की दृष्टपटाहट उसकी से व्यक्त होती थी।

(ङ) रतन की माँ का ध्यान उसके पर लगा रहता था।

8. सही कथन के सामने 'स' और गलत कथन के सामने 'ग' लिखिए —

(क) रतन बच्चों के साथ खेलकूद करता था।

(ख) रतन देखने में अन्य बच्चों की तरह था।

(ग) रतन एक बड़े बंगले में रहता था।

(घ) रतन को देखकर बच्चे भयभीत नहीं होते थे।

(ङ) रतन के खेलने के दौरान उसकी माँ का ध्यान उसके खेल पर लगा रहता था।



■ मैं और मेरा व्याकरण : अनुच्छेद लेखन : पृष्ठ संख्या - 166

9.

■ वृक्ष लगाओ, प्रदूषण भगाओ ■

10. विशेषण शब्दों को उचित विशेष्य से मिलाइए - (मैं और मेरा व्याकरण - पृष्ठ संख्या - 67)

(क) चार लीटर	(i) इमारत
(ख) ऊँची	(ii) वस्तुएँ
(ग) हरी	(iii) पानी
(घ) अधिक	(iv) व्यक्ति
(ङ) स्वस्थ	(v) मौसम
(च) सुहाना	(vi) घास

(3)

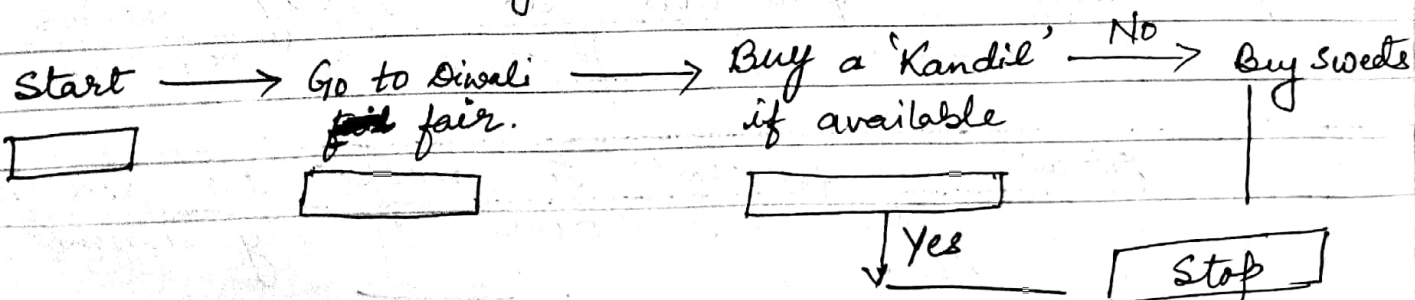
# Holidays Home-Work.

Class V

Sub: Computer


## Short Answer Questions.

- 1) Geeta prepared a slide on Diwali that consists of 5 slides. She used 'Picture with caption' layout. Now she wants to display all the slides together. Which view she will do so?
- 2) Mala made a presentation of 10 slides. She applied effects by which one slide switches to another during an on-screen presentation. Can you tell which feature of presentation package she has used to apply such effects?
- 3) Arun wants to make a Diwali presentation but does not know which things can be inserted to make a presentation more effective and attractive. Help Arun by telling the things he can use?
- 4) Identify the symbol of flowchart for the following situation.



5) Name the following symbols and mention about their functions.

(a)



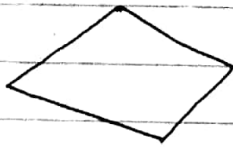
Name

Function

\_\_\_\_\_

\_\_\_\_\_

(b)



\_\_\_\_\_

\_\_\_\_\_

(c)



\_\_\_\_\_

\_\_\_\_\_

6) Is it true that computer helps in saving natural resources? If true explain how?

Long Answer Questions.

1) Draw and colour at least 5 secondary storage devices

2) Write names of atleast 5 operating systems. Also write the functions of operating system.

3) Draw a flowchart to display whether a number is positive or negative.

4) Draw a flowchart to accept the roll number, name and father's name of any student of all class.

\_\_\_\_\_x\_\_\_\_\_